

**Meat Quality Assurance**

Identify items on the table and list them on the lines below.

- \_\_\_\_\_
- \_\_\_\_\_
- \_\_\_\_\_
- \_\_\_\_\_

Answer the following.

- List one animal this medicine can be given too.  
\_\_\_\_\_
- What is the dosage amount for a 300 lbs animal?  
\_\_\_\_\_
- Where is the Quality Assurance recommended location on the animal for this injection?  
\_\_\_\_\_
- List the quality grade of the beef steak.  
\_\_\_\_\_
- Measure the backfat of the beef steak.  
\_\_\_\_\_
- Measure the size of the beef steak.  
\_\_\_\_\_

Station Score \_\_\_\_\_

**Dairy Project Station**

Identify the breeds and list them on the lines below.

- \_\_\_\_\_
- \_\_\_\_\_
- \_\_\_\_\_
- \_\_\_\_\_

Identify the parts and list them on the lines below.

- \_\_\_\_\_
- \_\_\_\_\_
- \_\_\_\_\_
- \_\_\_\_\_
- \_\_\_\_\_
- \_\_\_\_\_
- \_\_\_\_\_
- \_\_\_\_\_
- How often does a pregnant cow come into heat?  
\_\_\_\_\_
- What side does a cow carry a calf?  
\_\_\_\_\_


Station Score \_\_\_\_\_

# 2005 Minidoka County Jackpot Skill-a-thon

Rules: Visit a series of stations and perform the specific task.

Individual Name \_\_\_\_\_ Contestant Number \_\_\_\_\_

Total Score \_\_\_\_\_




**Feeds and Feeding Station**

Identify the feeds on the table and list them on the lines below.

- \_\_\_\_\_
- \_\_\_\_\_
- \_\_\_\_\_
- \_\_\_\_\_
- \_\_\_\_\_
- \_\_\_\_\_
- \_\_\_\_\_
- \_\_\_\_\_
- \_\_\_\_\_

Station Score \_\_\_\_\_





### Beef Project Station

Identify each breed and list them on the lines below

1. \_\_\_\_\_
2. \_\_\_\_\_
3. \_\_\_\_\_
4. \_\_\_\_\_
5. \_\_\_\_\_

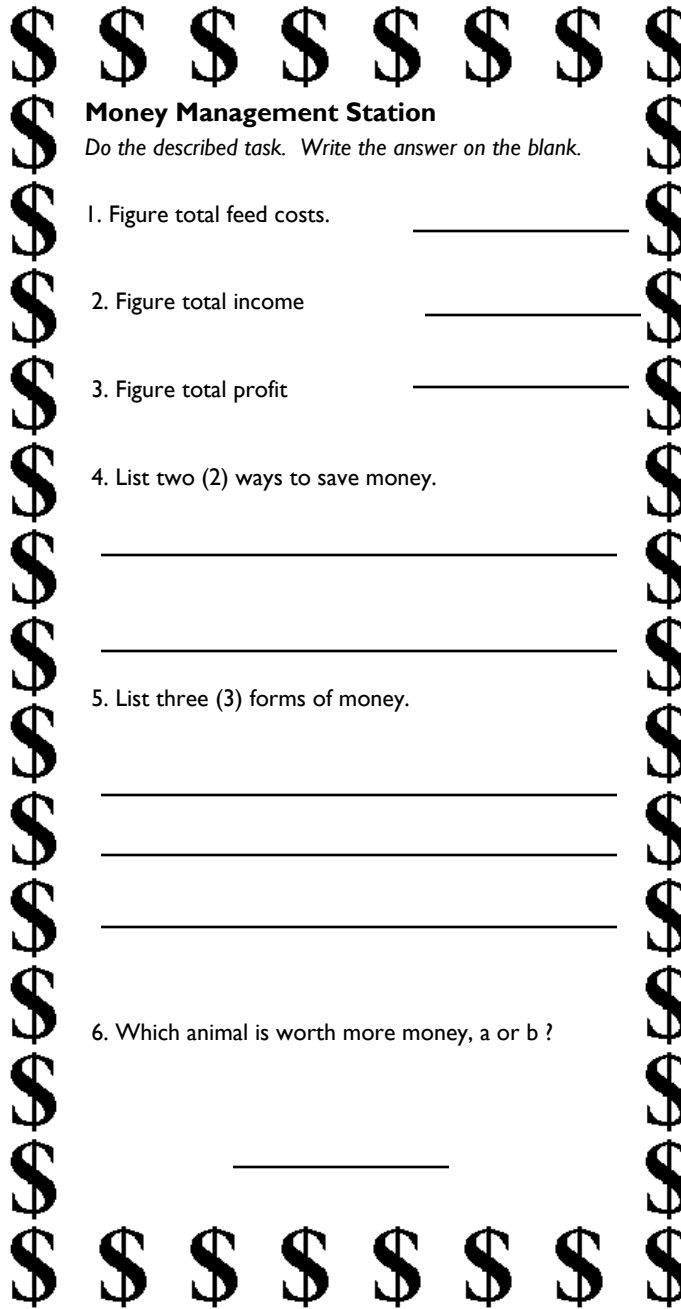
Identify show equipment and list on the lines below.

6. \_\_\_\_\_
7. \_\_\_\_\_
8. \_\_\_\_\_
9. \_\_\_\_\_
10. \_\_\_\_\_

Identify the labeled parts and list on the lines below.

11. \_\_\_\_\_
12. \_\_\_\_\_
13. \_\_\_\_\_

Station Score \_\_\_\_\_



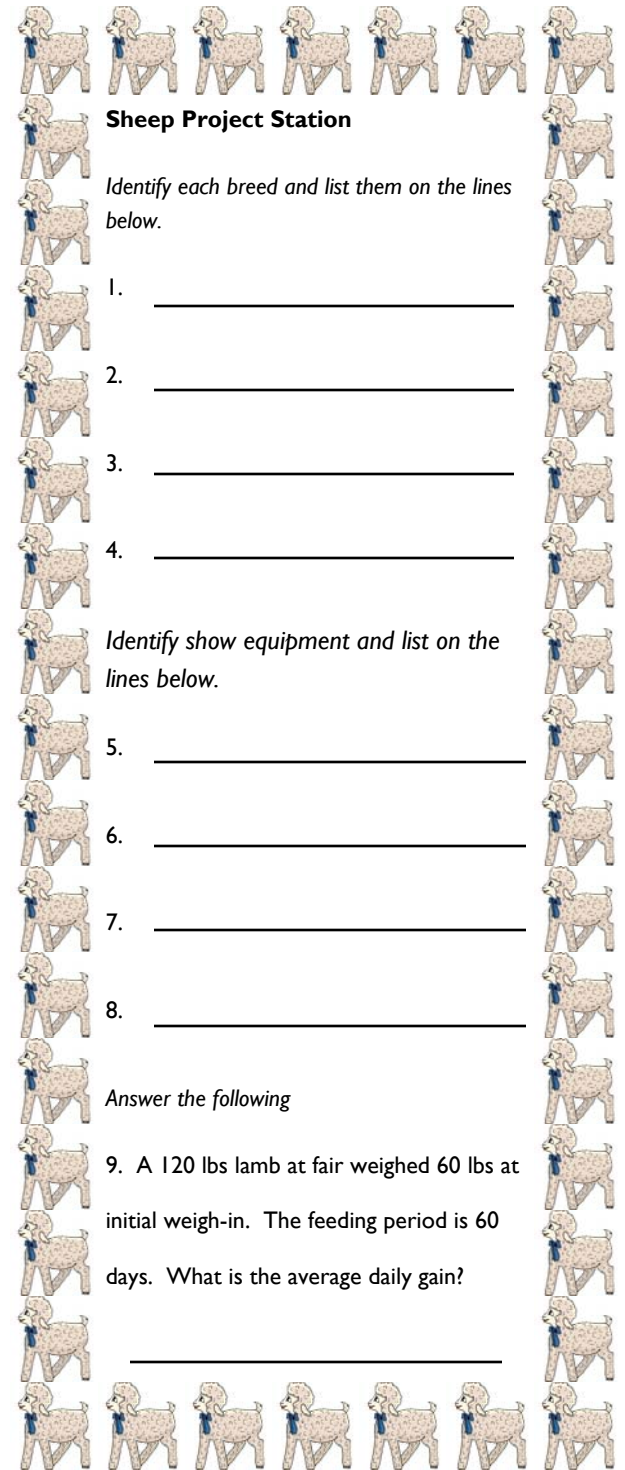
### Money Management Station

Do the described task. Write the answer on the blank.

1. Figure total feed costs. \_\_\_\_\_
2. Figure total income \_\_\_\_\_
3. Figure total profit \_\_\_\_\_
4. List two (2) ways to save money.  
\_\_\_\_\_  
\_\_\_\_\_
5. List three (3) forms of money.  
\_\_\_\_\_  
\_\_\_\_\_  
\_\_\_\_\_
6. Which animal is worth more money, a or b ?  
\_\_\_\_\_

**Opportunities  
to develop  
life skills**

Station Score \_\_\_\_\_



### Sheep Project Station

Identify each breed and list them on the lines below.

1. \_\_\_\_\_
2. \_\_\_\_\_
3. \_\_\_\_\_
4. \_\_\_\_\_

Identify show equipment and list on the lines below.

5. \_\_\_\_\_
6. \_\_\_\_\_
7. \_\_\_\_\_
8. \_\_\_\_\_

Answer the following

9. A 120 lbs lamb at fair weighed 60 lbs at initial weigh-in. The feeding period is 60 days. What is the average daily gain?

\_\_\_\_\_

Station Score \_\_\_\_\_